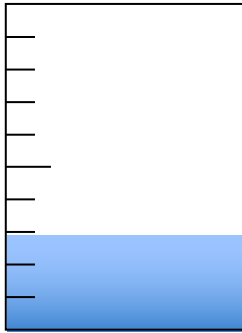


☆ いろがぬってある部分を分数であらわしましょう。

1ℓ

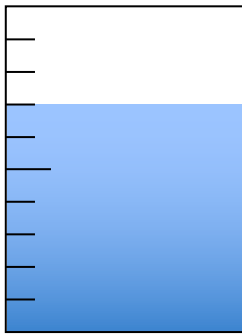


$$\frac{3}{10}$$

② そのうち  
3メモリに色がぬって  
あるので…

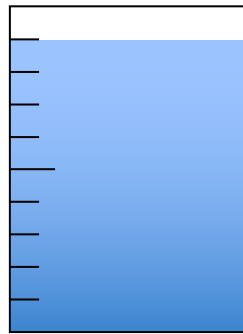
① 1までのメモリは  
ぜんぶで10

1ℓ



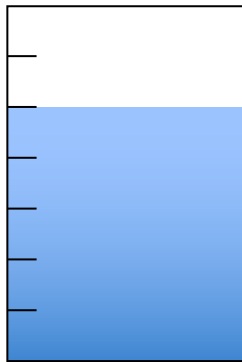
$$\frac{7}{10}$$

1ℓ



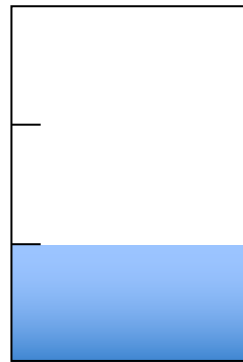
$$\frac{9}{10}$$

1ℓ




$$\frac{8}{10}$$

1ℓ




$$\frac{2}{10}$$


1ℓ



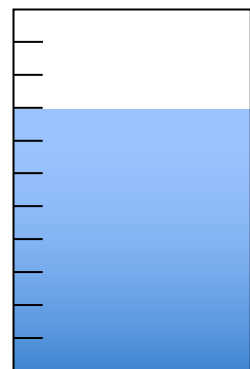
1ℓ



1ℓ




1ℓ




☆ 分数の大きさに合わせていろをぬりましょう。

1ℓ




$$\frac{3}{10}$$

1ℓ




$$\frac{1}{10}$$

1ℓ




$$\frac{7}{10}$$

1ℓ




$$\frac{1}{4}$$

1ℓ



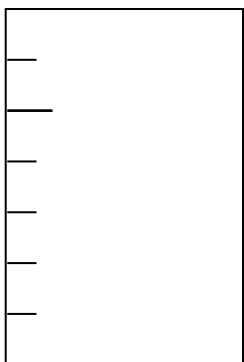
$$\frac{2}{3}$$

1




$$\frac{3}{5}$$

1



$$\frac{4}{5}$$

1



$$\frac{3}{4}$$